



Our Learning

Week 6 commencing 05.02.2024



This week in Year 4:

English: To create a Biography about Pele

Maths: To be able to tell the time on a 24-hour clock.

Topic: To look at similarities between Rio de Janeiro and London.

Year 4 Challenge

The last challenges answer was a feather!

What goes up, but never comes down?

Homework- Due Thursday 22nd February

Termly Spellings

In class each term, we have been focusing on some key spellings. These spellings come from the National Curriculum Statutory word-lists for years 3 and 4. Please revise these spellings with your child at home e.g. in the car, when cooking dinner etc... and practice putting these words into sentences.

believe

naughty

regular

although

different

peculiar

straight

women

favourite

potatoes

Each week, we will provide you and your child an optional activity to complete at home to help your child memorise their spellings. You can practice by creating a rap - your challenge is to try and get every word in the rap!

Additional Notes or Information for the week

As our digital world becomes increasingly advanced, it is vital the children of The Cambridge Primary School know how to stay safe online whilst understanding the benefits of technology. To enable you to refresh and develop your understanding of online safety, our school website now contains some very useful parent guides which were created by National Online Safety. These guides can be accessed through the following link <https://www.cambridgeschool.hants.sch.uk/page/?title=Online+Safety&pid=1187> or this QR code.

What will the children be learning in Year 4 next week?





English: To explore our new topic book- Along the Tapajos.

Maths: To consolidate understanding in fractions.

Topic: To begin to explore the Amazon Rainforest.



Maths- Time

Time in Words	24 Hour Clock	12 Hour Clock	Analogue
seven o'clock in the evening	19:00	7:00p.m.	
		11:00a.m.	
	14:15		
		8:20p.m	

Converting Time in Hours to Minutes

1 Fill in the blanks.

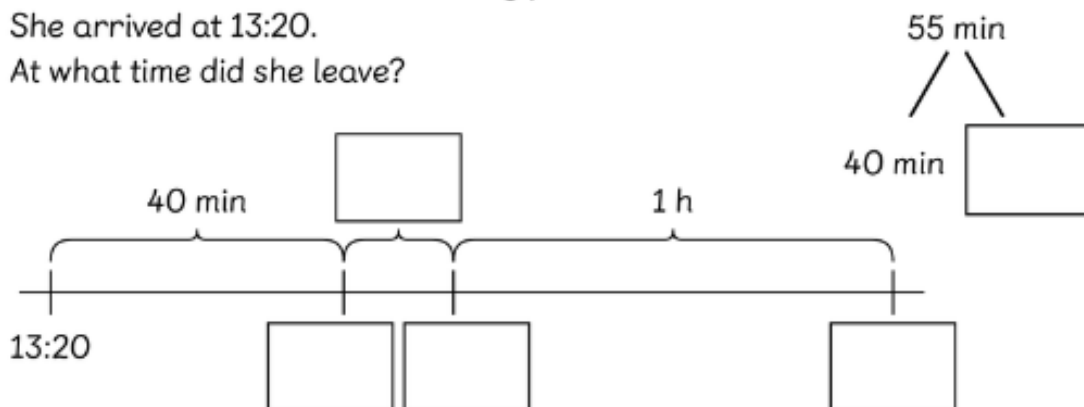
(a) $2 \text{ h} = \boxed{} \text{ min}$

$4 \text{ h} = \boxed{} \text{ min}$

$1 \text{ h} = 60 \text{ min}$



Hannah was at the local swimming pool for 1 hour 55 minutes.
She arrived at 13:20.
At what time did she leave?



Hannah left the local swimming pool at $\boxed{}$.

Topic homework- Create a fact file for The Amazon Rainforest. These will be used for our class display.