



Our Learning

Week commencing 11.09.23



This week in Year 2

Maths: We have been practicing our knowledge and understanding of place value.

English: We have been learning a new story. It is called 'The Kiss that Missed' - It's really exciting!

Science: We discussed, explored and defined the key terms within our topic 'living things.'

Home Learning

Home Learning

Reading: daily 10 minutes

Please listen to your child read their phonic reader book **every day** to help develop fluency, expression and comprehension. After listening to them read, **record** it in the Comments section in their reading record.

Weekly Spellings

| | Monday | Tuesday | Wednesday | Thursday | Friday |
|---------|--------|---------|-----------|----------|--------|
| sage | | | | | |
| age | | | | | |
| huge | | | | | |
| change | | | | | |
| charge | | | | | |
| village | | | | | |
| page | | | | | |
| hinge | | | | | |
| great | | | | | |

Important Dates:

Chestnut - Thursday 12th October - Windsor Castle

Beech - Friday 13th October - Windsor Castle

Hook Day - Thursday 19th October - Come dressed as anything to do with Castles (king, queen, princess, knight, joker)


Our new book this term 'Knights in Training.' We are reading it in class this half term as our class reader. If your child would like their own copy, these can be purchased on Amazon, please send it into school with their name in.

Next Week:

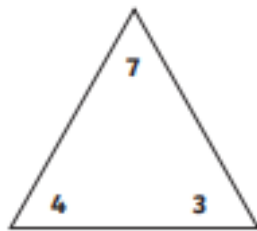
Maths: We are partitioning 2-digit numbers in different ways.

English: We will be creating a class innovation of 'The Kiss that Missed'.

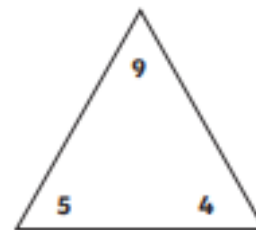
RAW: We will be exploring the special books to different religions.



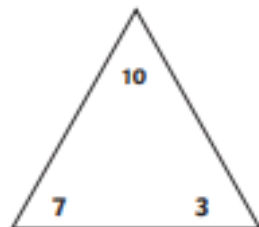
For each set of numbers, write four different addition and subtraction facts.



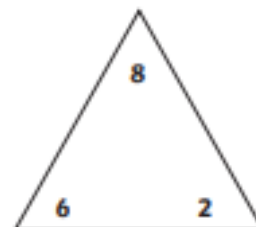
$$\begin{array}{rclcl} \square & + & \square & = & \square \\ \square & + & \square & = & \square \\ \square & - & \square & = & \square \\ \square & - & \square & = & \square \end{array}$$



$$\begin{array}{rclcl} \square & + & \square & = & \square \\ \square & + & \square & = & \square \\ \square & - & \square & = & \square \\ \square & - & \square & = & \square \end{array}$$



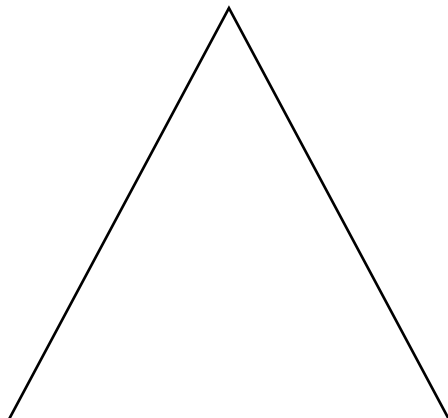
$$\begin{array}{rclcl} \square & + & \square & = & \square \\ \square & + & \square & = & \square \\ \square & - & \square & = & \square \\ \square & - & \square & = & \square \end{array}$$



$$\begin{array}{rclcl} \square & + & \square & = & \square \\ \square & + & \square & = & \square \\ \square & - & \square & = & \square \\ \square & - & \square & = & \square \end{array}$$

Challenge

Can you complete a number family triangle of your own?



$$\begin{array}{rclcl} \square & + & \square & = & \square \\ \square & + & \square & = & \square \\ \square & - & \square & = & \square \\ \square & - & \square & = & \square \end{array}$$